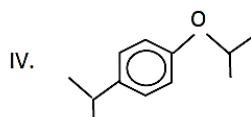
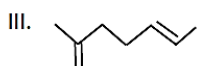
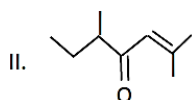
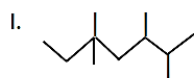


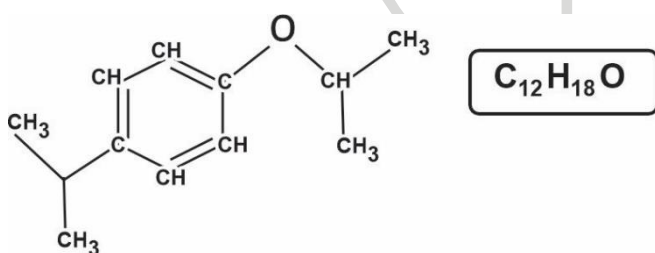
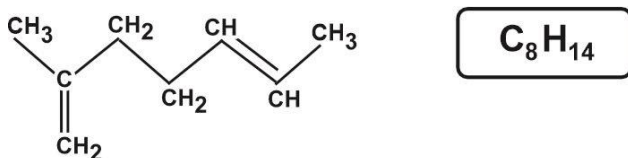
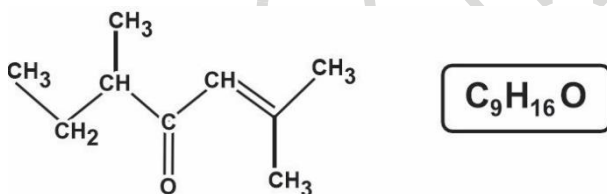
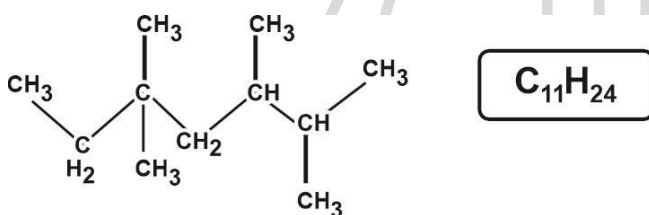
49. Considere os seguintes compostos orgânicos:



A sequência correta, de cima para baixo, é:

- A) C₁₁H₂₂, C₉H₁₆O, C₈H₁₄, C₁₂H₁₇O.
 B) C₁₁H₂₄, C₉H₁₆O, C₈H₁₄, C₁₂H₁₈O.
 C) C₁₁H₂₄, C₉H₁₅O, C₈H₁₅, C₁₂H₁₈O.
 D) C₁₁H₂₂, C₉H₁₆O, C₈H₁₃, C₁₂H₁₇O.

Assunto: Cadeias carbônicas / fórmulas



Item: B